





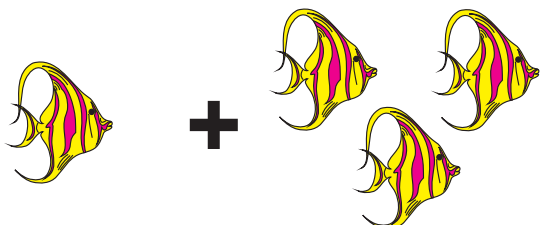
$$2 + 1 = \underline{\quad}$$



$$3 + 2 = \underline{\quad}$$




$$2 + 4 = \underline{\quad}$$



$$1 + 3 = \underline{\quad}$$



$$4 + 3 = \underline{\quad}$$



$$2 + 2 = \underline{\quad}$$